


CATS and FISH

THREE cats take THREE minutes to eat a total of THREE fish. At the same rate, how long will it take 100 cats to eat 100 fish?



Clip art: <http://classroomclipart.com>

COINS and PURSES

There are TWO coins and TWO purses. How can you place the coins so that one purse contains twice as many coins as the other?



HOMework: FRIED CHICKEN

Susan has a small frying pan so that only TWO chicken pieces can fit. She needs to fry THREE chicken pieces, both sides, and it takes ONE minute to fry ONE side. In how many minutes can Susan fry THREE pieces?

Clip art: <http://classroomclipart.com>



FIND AND COLOR THE BUBBLES WITH PALINDROMES:

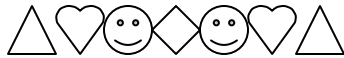
ENGLISH WORDS palindromes – in RED

NUMBERS – in BLUE

OTHER palindromes – in YELLOW

III

XIV



CCCC

LEVEL

191

SAIPPUAKIVIKAUPPIAS

ΠΑΠΑ

XIX

PUP

TOOTH

23737

MADAM
--

МАДАМ

ТОТ

RADAR

TOTO

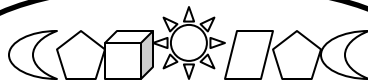
ΠΟΤΟΠ

75319192357

INGIRUM IMUS NOCTE ET CONSUMIMUR IGNI

MMM

ШАЛАШ



RIVER

MAMA

WHAT IS THE DIFFERENCE BETWEEN THESE TWO GROUPS?

DID HANNAH SAY AS HANNAH DID?

OOZY RAT IN A SANITARY ZOO

I PREFER PI

LONELY TYLENOL

SH! TOM SEES MOTHS

PULL UP

PETS STEP

NOT A TON

STEP ON NO PETS

DON DID NOD

NOW I WON

CAN YOU READ THIS?

(I plan to get / buy a few mirrors and pass them out in the class along with this handout)

